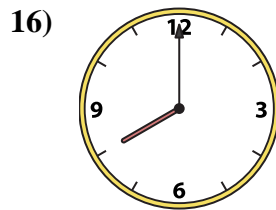
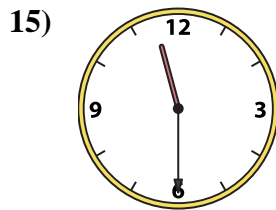
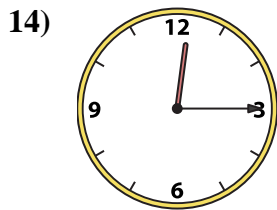
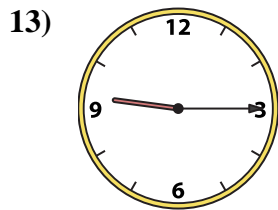
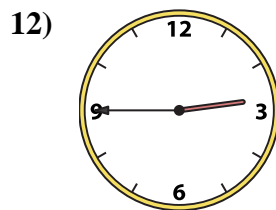
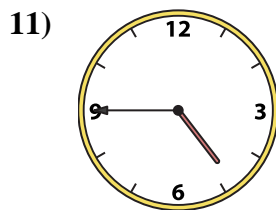
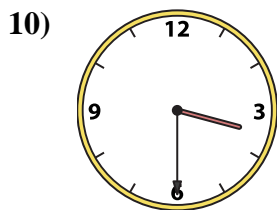
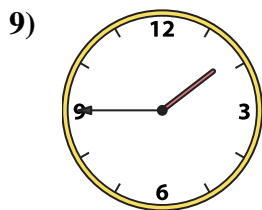
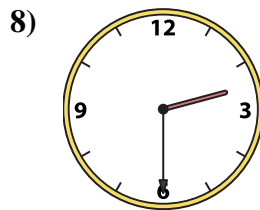
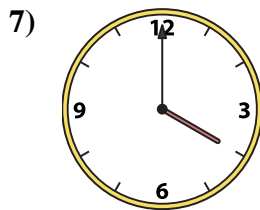
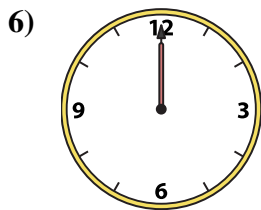
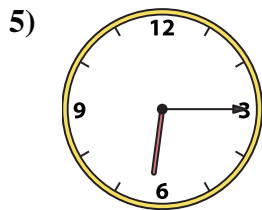
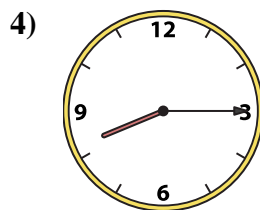
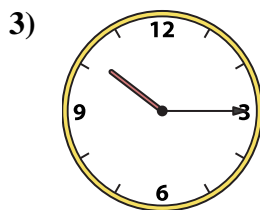
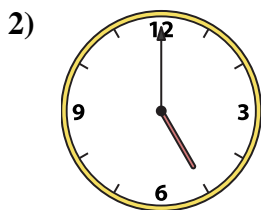
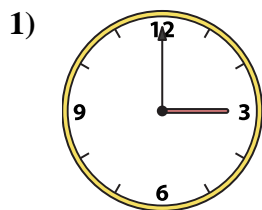




Match the analog clock to the digital clock.



A. 2:30

B. 9:15

C. 3:00

D. 10:15

E. 11:30

F. 8:00

G. 12:00

H. 8:15

I. 4:45

J. 2:45

K. 4:00

L. 3:30

M. 5:00

N. 1:45

O. 6:15

P. 12:15

Answers

1. \_\_\_\_\_

2. \_\_\_\_\_

3. \_\_\_\_\_

4. \_\_\_\_\_

5. \_\_\_\_\_

6. \_\_\_\_\_

7. \_\_\_\_\_

8. \_\_\_\_\_

9. \_\_\_\_\_

10. \_\_\_\_\_

11. \_\_\_\_\_

12. \_\_\_\_\_

13. \_\_\_\_\_

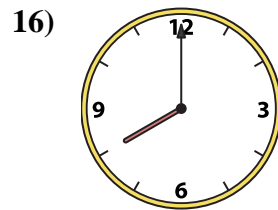
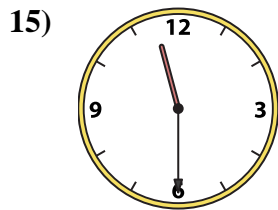
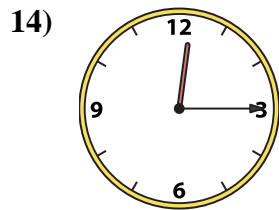
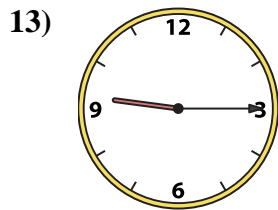
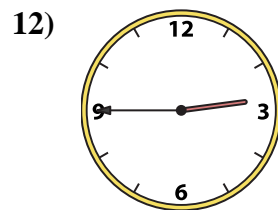
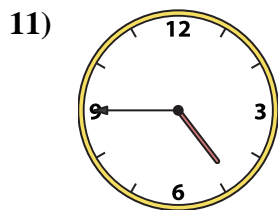
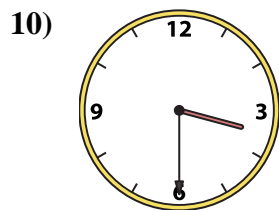
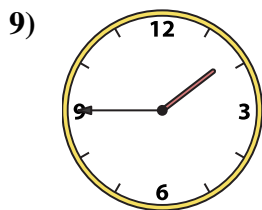
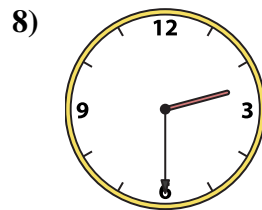
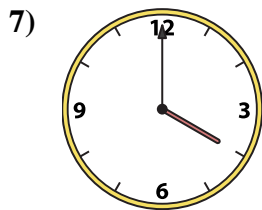
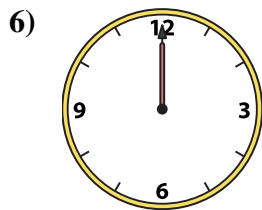
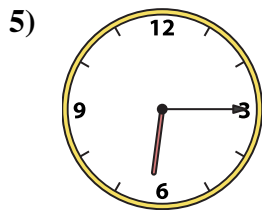
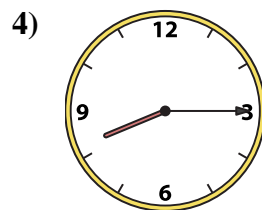
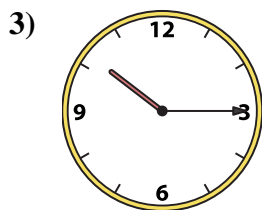
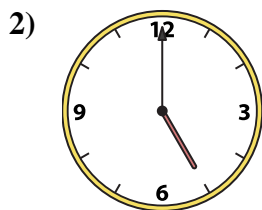
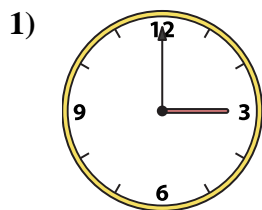
14. \_\_\_\_\_

15. \_\_\_\_\_

16. \_\_\_\_\_



Match the analog clock to the digital clock.



A. **2:30**

B. **9:15**

C. **3:00**

D. **10:15**

E. **11:30**

F. **8:00**

G. **12:00**

H. **8:15**

I. **4:45**

J. **2:45**

K. **4:00**

L. **3:30**

M. **5:00**

N. **1:45**

O. **6:15**

P. **12:15**

**Answers**

1. **C**

2. **M**

3. **D**

4. **H**

5. **O**

6. **G**

7. **K**

8. **A**

9. **N**

10. **L**

11. **I**

12. **J**

13. **B**

14. **P**

15. **E**

16. **F**